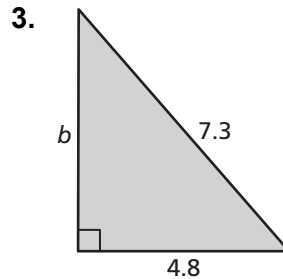
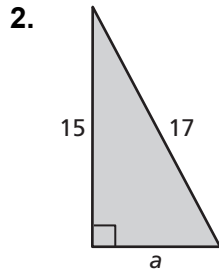
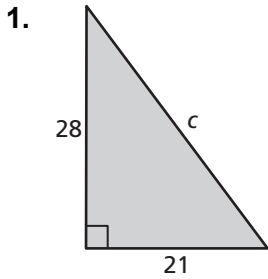


7.3

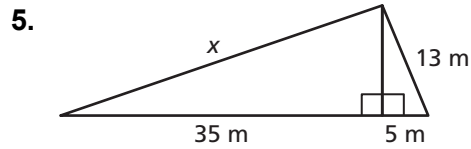
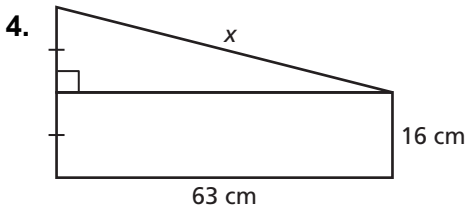
Practice

For use after Lesson 7.3

Find the missing length of the triangle.



Find the missing length of the figure.



6. In wood shop, you make a bookend that is in the shape of a right triangle. What is the base b of the bookend?

