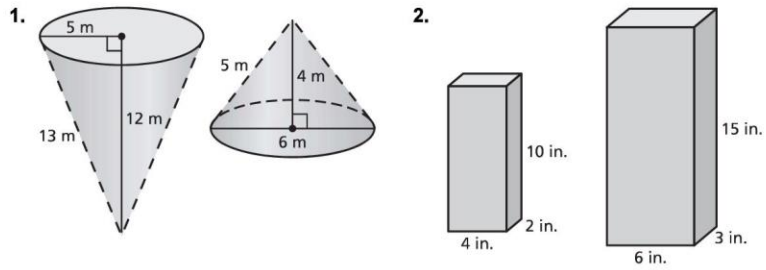
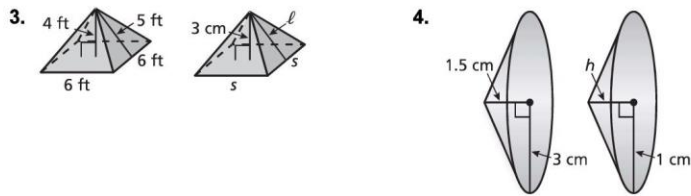


8.4 Practice
For use after Lesson 8.4

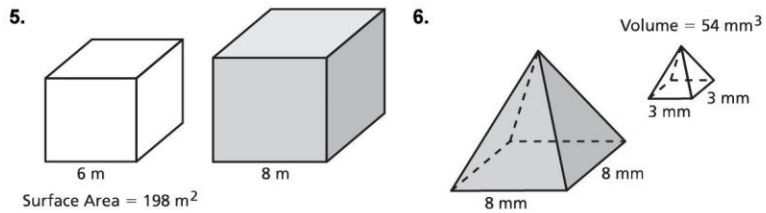
Determine whether the solids are similar.



The solids are similar. Find the missing dimension(s).



The solids are similar. Find the surface area S or volume V of the shaded solid.



A series of horizontal blue lines for writing, with a vertical red margin line on the left side.

