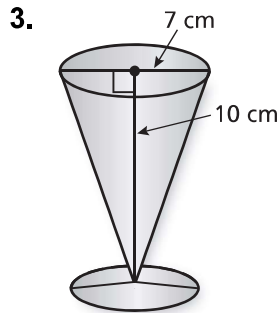
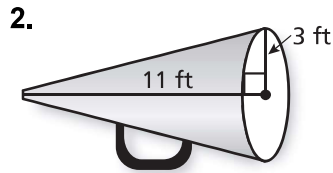
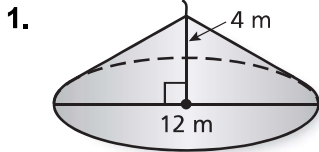


# 8.2

## Practice

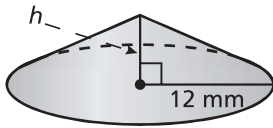
For use after Lesson 8.2

Find the volume of the cone. Round your answer to the nearest tenth.

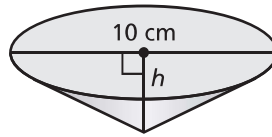


Find the missing dimension of the cone. Round your answer to the nearest tenth.

4. Volume =  $300\pi \text{ mm}^3$



5. Volume =  $78.5 \text{ cm}^3$



6. What is the volume of the catch and click cone?

